

**SARASWATI VIDYA MANDIR
SENIOR SECONDARY SCHOOL
SECTOR-Q, ALIGANJ
LUCKNOW-226024**

Holiday Homework



**Class
3rd**

INSTRUCTIONS

1. Summer Vacation will be Start from 17 May 2023 to 25 June 2023. The School will reopen from 26 June 2023 at 08:00 A.M to 12:30 P.M
2. Holiday homework for all the classes and for all the subject will be uploaded on the website svmlkoaliganj.org Student can download it from the website
3. Students will do holiday homework on separate homework copy for each subject and same will be submitted after opening of school from 26 June to 30 June.
3. Student should study regularly and parents are requested to help their ward for the completion of homework.
4. Marks will also be given for holiday homework and it will also be added in first monthly examination for the respective subject
5. All those students whose fee is not deposited or pending are requested to deposit it immediately to avoid any inconvenience during summer vacation.
6. Online activity will also be held in the first and second week of June Details of activities will be made available on whatsapp group & school website.
7. For any doubt or information you can consult your class teacher



Principal

1. मिलान करो-



पत्ता

थालियाँ



गमल

जूते



थाली

पत्ते



जूता


गमले



2. चित्र देख कर सही ✓ गलत ✗ का चिह्न लगाओ-

एक

अनेक



3. वचन बदलिए-


बकरियाँ जूते तितलियाँ केले




जूता



केला



तितली



बकरी



अभ्यास कार्य - नाम शब्द (संज्ञा) 10 Marks:

दिए गए चित्रों को उनके नाम से मिलाइए:-

1.



रीना

2.



खरगोश

3.



कुरसी

4.



सूरज

5.




चारमीनार

Anjana Deokante





प्रश्न . चित्र देखकर खाली स्थान भरें ।



कहानी , पेड़ , हरियाली , बच्चे , बगीचे

1. यह _____ का चित्र है ।
2. बगीचे में _____ खेल रहे हैं ।
3. दो बच्चे _____ पर बैठे हैं ।
4. माँ रीना को _____ सुना रही है ।
5. बगीचे में _____ है ।

चित्र देख कर रिक्त स्थान की पूर्ति करो।

- यह..... का पेड़ है।



- यह मेरा है।



- वह एक है।



- यह हरे रंग का..... है।



- यह..... है।



-फलों का राजा है।



- यह एक है।





शेर और चूहा



अपठित गद्यांश पढ़कर नीचे लिखे प्रश्नों को हल करें।



एक समय की बात है। एक जंगल में एक शेर और एक चूहा रहता था। एक दिन शेर सो रहा था। चूहा सोते हुए शेर के ऊपर खेलने लगा। शेर की नींद खुल गई और उसने गुस्से से चूहे को पकड़ा और मार डालना चाहा। किन्तु चूहे ने माफ़ी मांग कर खुद को बचा लिया।

कुछ समय बाद शिकारियों ने उस शेर को जाल में पकड़ लिया। शेर बहुत घबरा गया। चूहे ने शेर को इस हालत में देखा, उसने झट से अपने दाँतों से जाल को काट दिया और शेर की जान बचाई।

सीख - अच्छा करो ,अच्छा मिलेगा।

- जंगल में कौन - कौन रहता था ?

- चूहे ने शेर को कैसे बचाया ?

- हमें इस कहानी से क्या सीख मिलती है ?



Holiday Home Work

Class-3rd

Subject- English

1 Write one page cursive writing in paragraph daily in English
Holiday home work copy.

2 Practice Reading from lesson 1 to 6 daily.

3 Write 10 lines on 'Good Manners 'in Holiday Home Work
copy.

English Activity-----

A. Write and learn any poem from your book and draw the
diagram on punch sheet or chart paper.

B. Learn any two moral stories.

C Learn introduction about yourself minimum 10 lines.

D. Write 10 names of cricketers and paste their photos on
punch sheet.

Note---English Holiday Home Work should be done in
English Holiday Home Work copy.

Start a conversation



GK/English Worksheet

1. My name is _____



2. I am _____ years old.

3. I have _____ brothers.

4. I have _____ sisters.



5. My father's name is _____



6. My father works at _____

7. My mother's name is _____

8. My mother works at _____



9. My nationality is _____

10. My favourite fruit is _____

11. My best friend is _____



12. My hometown is _____

13. My grandmother's name is _____

14. My grandfather's name is _____



TOPIC : PICTURE COMPOSITION

Q. Look at the picture carefully and complete the sentences using the words from the help box :



Painting , swing football , reading , six playing , sitting , park , happy, two

1. This is a scene of a
2. The children are .
3. A girl is making a .
4. One boy is a book .
5. Two boys are playing with a .
- 6 . Another boy is on the tree .
7. A girl is on the .
8. There are trees.
9. There are children .
10. Everybody is looking very

Write.

I have ...









He / She has ...



| | | | |
|----|-----|------------|--|
| 1 | I | have a box |  a box |
| 2 | I | |  a ruler |
| 3 | She | |  a chair |
| 4 | She | |  a pencil |
| 5 | He | |  a bin |
| 6 | He | |  a notebook |
| 7 | I | |  a pen |
| 8 | I | |  a desk |
| 9 | She | |  a crayon |
| 10 | He | |  a c |



Circle the correct fruit.

| | |
|---|------------------------|
|  | apple pear peach |
|  | grapes pear orange |
|  | banana peach orange |
|  | apple cherries grapes |
|  | banana pear apple |
|  | watermelon pear peach |
|  | watermelon grapes pear |
|  | orange cherries banana |

VERB TO BE

Your house _____ nice



- a) am
- b) is
- c) are

Ellis and I _____ sad



- a) am
- b) is
- c) are

I _____ surprised



- a) am
- b) is
- c) are

Your parents _____ there



- a) am
- b) is
- c) are

Elephants _____ big



- a) am
- b) is
- c) are

The hamster _____ orange



- a) am
- b) is
- c) are

The piano _____ old



- a) am
- b) is
- c) are

I _____ at the beach



- a) am
- b) is
- c) are

Jean and Eve _____ here



- a) am
- b) is
- c) are

We _____ students



- a) am
- b) is
- c) are

The weather _____ sunny



- a) am
- b) is
- c) are

My hat _____ small



- a) am
- b) is
- c) are

Holiday Home work

(MATHS)

Session :2023-24

Class:-3

Q. 1 Write and learn Table 2To20.

Q. 2 Write 1 To 200 Roman number.

Q.3 Revise chapter 1,2 and 3.

Q. 4 Fill in the worksheet 7 To 14.

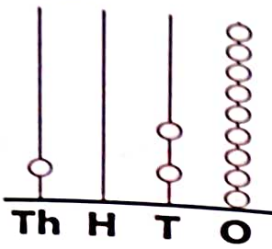
Q. 5 Project work :- Write the Roman symbols in bold and with the help of plywood. Iron sheet and thick papers too.

WORKSHEET-7


SHOWING NUMERAL ON THE ABACUS

Draw the beads on the box to show the numeral.

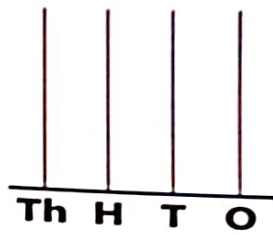
1. 1029



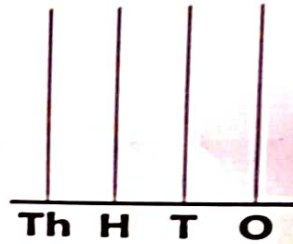
2. 3238




3. 5347




4. 7706



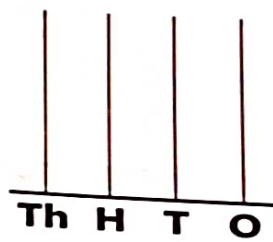
5. 2493



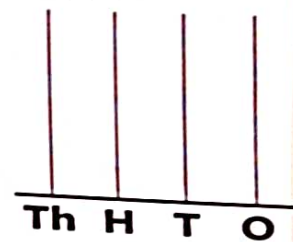
6. 4144



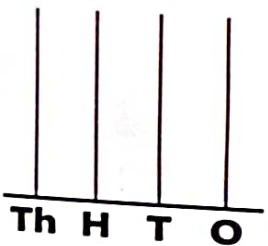
7. 6592




8. 8215



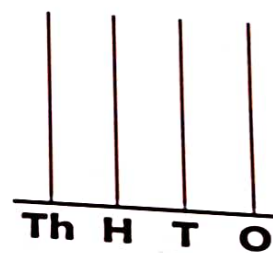
9. 7565




10. 4896



11. 6028



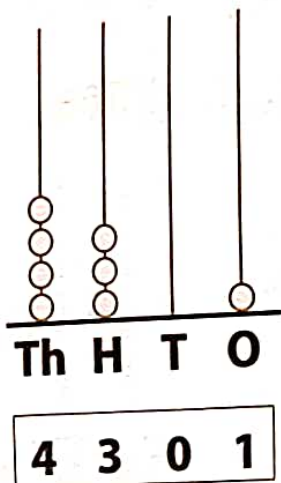
12. 9999



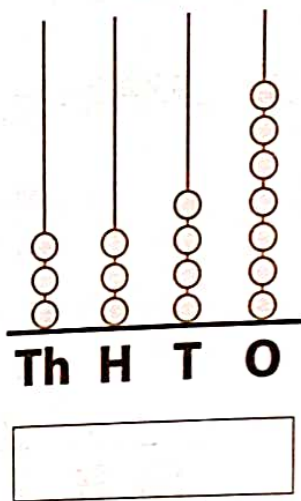
WORKSHEET-8

READ NUMERAL ON THE ABACUS

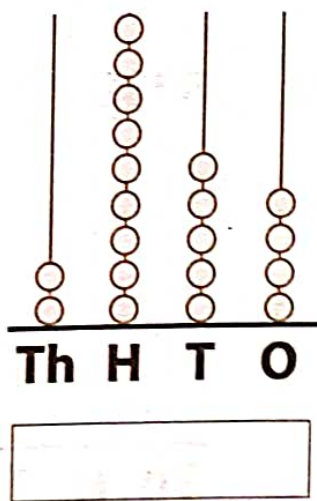
1.



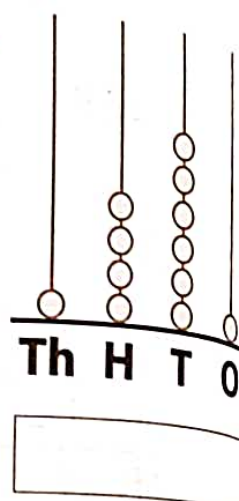
2.



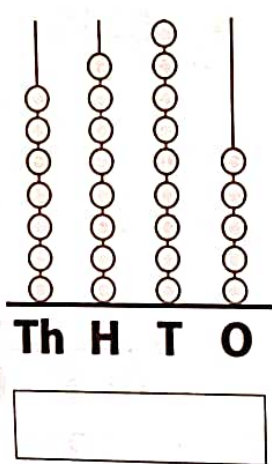
3.



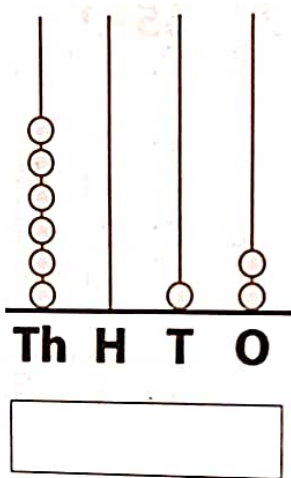
4.



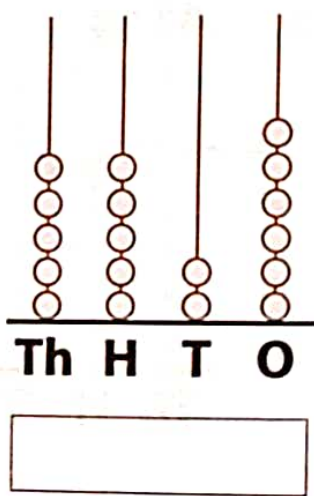
5.



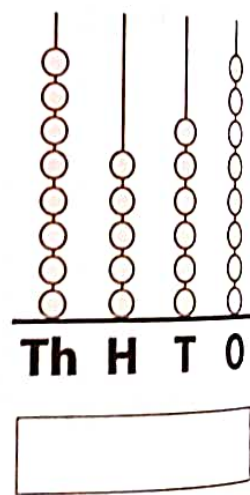
6.



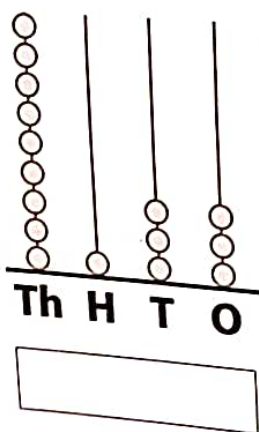
7.



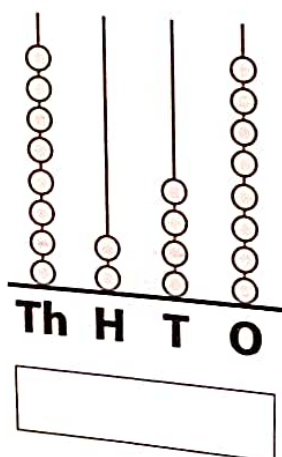
8.



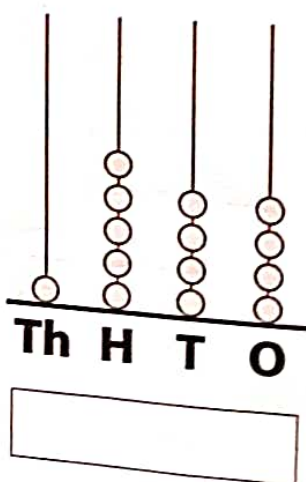
9.



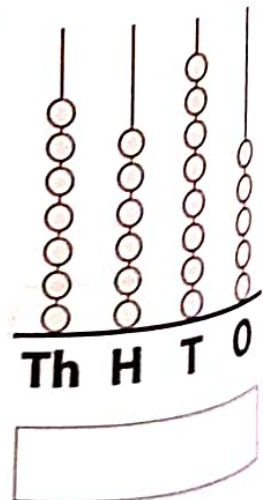
10.



11.



12.



WORKSHEET-9

COMPARING NUMBERS/ASCENDING AND DESCENDING ORDER

1. Put the correct sign ($<$, $=$, $>$) in the blanks.

| | | | |
|-----|---|-----|-------------------|
| (a) | $7128 > 7123$ | (b) | $8543 \quad 8285$ |
| (c) | $6512 \quad 6512$ | | |
| (d) | $6000 + 400 + 20 + 3 \quad 6432$ | | |
| (e) | $7124 \quad 7000 + 100 + 20 + 4$ | | |
| (f) | 5 thousands 7 hundreds 6 tens 2 ones $\quad 5726$ | | |

2. An encyclopedia on toys has 4021 pages and one on books has 3982 pages. Which has more pages? _____

3. Write in ascending order.

| | | |
|-----|------------------------------|--|
| (a) | 2334, 9294, 6835 | |
| (b) | 5531, 6502, 8343, 2353 | |
| (c) | 2334, 4405, 7475, 5387, 4883 | |

4. Write in descending order.

| | | |
|-----|------------------------------|--|
| (a) | 1536, 9349, 6448 | |
| (b) | 5216, 7329, 7438, 3551 | |
| (c) | 4622, 7393, 4448, 8561, 9873 | |

5. A city has six parts A, B, C, D, E and F.

2093 people live in part A, 9813 people live in part B, 8721 people live in part C, 4091 people live in part D, 9887 people live in part E and 6752 people live in part F.

(a) Fill in the table.

| Part → | A | B | C | D | E | F |
|-------------------|---|---|---|---|---|---|
| How many people → | | | | | | |

(b) Arrange the parts in ascending order.

(c) Arrange the parts in descending order.

(d) Of the parts C and D which part has more people?

(e) Of the parts B and F which part has less people?

(f) Arrange the parts A, C and E in ascending order.

(g) Arrange the parts B, D and F in descending order.

WORKSHEET-10

SMALLEST AND GREATEST NUMBERS USING GIVEN DIGITS

1. **Make the greatest and smallest 4-digit numbers using 3, 7, 6 and 5.**
Repetition is not allowed.

Greatest : 7653

Smallest : 3567

2. **Make the greatest and smallest 4-digit numbers using 2, 4, 5 and 7.**
Repetition is allowed.

Greatest : _____

Smallest : _____

3. **Make the greatest and smallest 4-digit numbers using 0, 2, 8 and 3.**
Repetition is not allowed.

Greatest : _____

Smallest : _____

4. **Make the greatest and smallest 4-digit numbers using 0, 4, 5 and 7.**
Repetition is allowed.

Greatest : _____

Smallest : _____

5. **Make the greatest and smallest 4-digit numbers using 4, 6, 7, 8 and 9.**
Repetition is not allowed.

Greatest : _____

Smallest : _____

6. **Make the greatest and smallest 4-digit numbers using 9, 8, 6, 5 and 0.**

Repetition is allowed.

Greatest : _____

Smallest : _____

ROUNDING OF NUMBERS**1. Round the following to nearest ten.**

(a) 5131 is nearly equal to 5130 .

(b) 6239 is nearly equal to _____ .

(c) 5685 is nearly equal to _____ .

2. Round the following to nearest hundred.

(a) 6295 is nearly equal to _____ .

(b) 8957 is nearly equal to _____ .

(c) 9823 is nearly equal to _____ .

3. Round the following to nearest thousand.

(a) 7824 is nearly equal to _____ .

(b) 2301 is nearly equal to _____ .

(c) 4521 is nearly equal to _____ .

4. An exhibition was visited by 8953 people today. What is the number of visitors:

(a) Rounded to nearest ten : _____ .

(b) Rounded to nearest hundred : _____ .

(c) Rounded to nearest thousand : _____ .

(d) Which is the most accurate? : _____ .

5. Fill in the blanks with ten/hundred/thousand.

- (a) 8972 is written as 8970 after rounding to nearest _____.
- (b) 7173 is written as 7200 after rounding to nearest _____.
- (c) 9082 is written as 9000 after rounding to nearest _____.

6. Fill in the blanks with the following numbers

7003, 6993, 7051, 7204 [each number can be used only once]

- (a) _____ rounded to nearest ten is equal to 7200.
- (b) _____ rounded to nearest hundred is equal to 7100.
- (c) _____ rounded to nearest ten or hundred or thousand is equal to 7000.
- (d) _____ rounded to nearest thousand is equal to 7000.
- (e) Which is greater 6993 rounded to nearest ten or 6993 rounded to nearest hundred.
-

Space for Rough Work

WORKSHEET-12

ADDITION BY REGROUPING

1. $5421 + 3352$

$$= \underline{5} \text{ thousands} + \underline{4} \text{ hundreds} + \underline{2} \text{ tens} + \underline{1} \text{ ones}$$

$$+ \underline{3} \text{ thousands} + \underline{3} \text{ hundreds} + \underline{5} \text{ tens} + \underline{2} \text{ ones}$$

$$= \boxed{\underline{5} + \underline{3}} \text{ thousands} + \boxed{\underline{4} + \underline{3}} \text{ hundreds}$$

$$+ \boxed{\underline{2} + \underline{5}} \text{ tens} + \boxed{\underline{1} + \underline{2}} \text{ ones}$$

$$= \underline{8} \text{ thousands} + \underline{7} \text{ hundreds} + \underline{7} \text{ tens} + \underline{3} \text{ ones}$$

$$= \underline{\hspace{2cm}} \underline{8773} \underline{\hspace{2cm}}$$

2. $4521 + 3233$

$$= \underline{\hspace{1cm}} \text{ thousands} + \underline{\hspace{1cm}} \text{ hundreds} + \underline{\hspace{1cm}} \text{ tens} + \underline{\hspace{1cm}} \text{ ones}$$

$$+ \underline{\hspace{1cm}} \text{ thousands} + \underline{\hspace{1cm}} \text{ hundreds} + \underline{\hspace{1cm}} \text{ tens} + \underline{\hspace{1cm}} \text{ ones}$$

$$= \boxed{\underline{\hspace{1cm}} + \underline{\hspace{1cm}}} \text{ thousands} + \boxed{\underline{\hspace{1cm}} + \underline{\hspace{1cm}}} \text{ hundreds}$$

$$+ \boxed{\underline{\hspace{1cm}} + \underline{\hspace{1cm}}} \text{ tens} + \boxed{\underline{\hspace{1cm}} + \underline{\hspace{1cm}}} \text{ ones}$$

$$= \underline{\hspace{1cm}} \text{ thousands} + \underline{\hspace{1cm}} \text{ hundreds} + \underline{\hspace{1cm}} \text{ tens} + \underline{\hspace{1cm}} \text{ ones}$$

=

3. $1234 + 5601$

= $\underline{\quad}$ thousands + $\underline{\quad}$ hundreds + $\underline{\quad}$ tens + $\underline{\quad}$ ones

+ $\underline{\quad}$ thousands + $\underline{\quad}$ hundreds + $\underline{\quad}$ tens + $\underline{\quad}$ ones

= $\underline{\quad} + \underline{\quad}$ thousands + $\underline{\quad} + \underline{\quad}$ hundreds

+ $\underline{\quad} + \underline{\quad}$ tens + $\underline{\quad} + \underline{\quad}$ ones

= $\underline{\quad}$ thousands + $\underline{\quad}$ hundreds + $\underline{\quad}$ tens + $\underline{\quad}$ ones

= $\underline{\hspace{2cm}}$

4. $1234 + 4321$

= $\underline{\quad}$ thousands + $\underline{\quad}$ hundreds + $\underline{\quad}$ tens + $\underline{\quad}$ ones

+ $\underline{\quad}$ thousands + $\underline{\quad}$ hundreds + $\underline{\quad}$ tens + $\underline{\quad}$ ones

= $\underline{\quad} + \underline{\quad}$ thousands + $\underline{\quad} + \underline{\quad}$ hundreds

+ $\underline{\quad} + \underline{\quad}$ tens + $\underline{\quad} + \underline{\quad}$ ones

= $\underline{\quad}$ thousands + $\underline{\quad}$ hundreds + $\underline{\quad}$ tens + $\underline{\quad}$ ones

ADDITION WITHOUT/WITH CARRY

Addition without carry.

1.

| | | | |
|---|---|---|---|
| 6 | 2 | 5 | 6 |
| + | 2 | 4 | 3 |
| 2 | 4 | 3 | 2 |
| 8 | 6 | 8 | 8 |

2.

| | | | |
|---|---|---|---|
| 7 | 4 | 2 | 4 |
| + | 1 | 2 | 5 |
| | | | |
| | | | |

3.

| | | | |
|---|---|---|---|
| 5 | 1 | 6 | 2 |
| + | 4 | 7 | 2 |
| | | | |
| | | | |

4.

| | | | |
|---|---|---|---|
| 4 | 3 | 2 | 5 |
| + | 2 | 6 | 3 |
| | | | |
| | | | |

5.

| | | | |
|---|---|---|---|
| 4 | 4 | 5 | 1 |
| + | 5 | 3 | 2 |
| | | | |
| | | | |

6.

| | | | |
|---|---|---|---|
| 2 | 4 | 5 | 5 |
| + | 1 | 5 | 2 |
| | | | |
| | | | |

7.

| | | | |
|---|---|---|---|
| 5 | 5 | 2 | 7 |
| + | 1 | 2 | 3 |
| | | | |
| | | | |

8.

| | | | |
|---|---|---|---|
| 3 | 3 | 1 | 9 |
| + | 2 | 6 | 4 |
| | | | |
| | | | |

9. $2423 + 3535 =$ _____

10. $7324 + 1261 =$ _____

Addition with carry.

11.

| | | | |
|---|---|---|---|
| | | | |
| 5 | 8 | 1 | 6 |
| + | 2 | 4 | 2 |
| | | | |
| | | | |

12.

| | | | |
|---|---|---|---|
| | | | |
| 6 | 5 | 8 | 8 |
| + | 1 | 6 | 7 |
| | | | |
| | | | |

13.

| | | | |
|---|---|---|---|
| | | | |
| 7 | 4 | 9 | 7 |
| + | 2 | 3 | 6 |
| | | | |
| | | | |

14.

| | | | | |
|---|---|---|---|---|
| | | | | |
| 7 | 6 | 9 | 4 | |
| + | 1 | 2 | 3 | 7 |
| | | | | |

15.

| | | | | |
|---|---|---|---|---|
| | | | | |
| 7 | 3 | 8 | 4 | |
| + | 1 | 9 | 2 | 6 |
| | | | | |

16.

| | | | | |
|---|---|---|---|---|
| | | | | |
| 4 | 4 | 7 | 7 | |
| + | 3 | 7 | 5 | 4 |
| | | | | |

17.

| | | | | |
|---|---|---|---|---|
| | | | | |
| 6 | 5 | 2 | 6 | |
| + | 1 | 2 | 7 | 9 |
| | | | | |

18.

| | | | | |
|---|---|---|---|---|
| | | | | |
| 5 | 6 | 8 | 7 | |
| + | 2 | 1 | 3 | 5 |
| | | | | |

19. $4525 + 3275 =$ _____

20. $5337 + 2185 =$ _____

Adding three numbers.

21.

| | | | | |
|---|---|---|---|---|
| | 4 | 1 | 2 | 4 |
| | 2 | 3 | 5 | 3 |
| + | | 4 | 2 | 1 |
| | | | | |

22.

| | | | | |
|---|---|---|---|---|
| | 6 | 5 | 4 | 6 |
| | 2 | 2 | 4 | 1 |
| + | | 2 | 0 | 2 |
| | | | | |

23.

| | | | | |
|---|---|---|---|---|
| | | | | |
| | 4 | 1 | 7 | 1 |
| | 1 | 9 | 3 | 5 |
| + | 2 | 8 | 2 | 6 |
| | | | | |

24.

| | | | | |
|---|---|---|---|---|
| | | | | |
| | 2 | 8 | 1 | 7 |
| | 4 | 2 | 6 | 2 |
| + | | 7 | 6 | 8 |
| | | | | |

ADDITION STORIES

1. A cold storage had 2345 crates of fruits . 2413 more crates were stored today. How many crates are stored in the cold storage now?

2. A zoo had 3591 animals till last year. 1205 more animals were added this year. How many animals does the zoo have now?

3. 5103 people visited a shrine yesterday and 2672 people visited it today. How many people visited the shrine in these two days?

4. A box has 4130 pens. Another box has 2344 pens. How many pens in all do the two boxes have?

5. 3192 boys and 4198 girls study in a school. How many students study in this school?

6. A town has 2516 adult men, 2496 adult women and 1236 children. What is the population of the town?

Subject – Science

Following work will be done on daily basis :

- Read one paragraph daily from chapter 1 to 5.
- Find out new terms and their meanings from the chapter 1 to 5.
- Learn new terms and find out exercise in book from chapter 1 to 5.

Project work – 1

Collect 5 leaves of different plants dry them and paste it on scrap book.

Worksheet -1

Fill in the blanks :

1. Snakes live in a
2. Birds make their own
3. Sheep gives usfor us .
4. Omnivorous animals are

Match the following :

Column A.

1. Tiger, Lion.
2. Rabbit ,Cow
3. Dog, Crow.
4. Giraffe, Goat.
5. Frog ,Whale.
6. Owl, Bats.

Column B

- Pet animals
- Aerial animals
- Wild animals
- Water animals
- Omnivorous animals
- Herbivorous animals

Project work – 2

Draw a chart of a plant with their all parts including roots , stem , leaves , flower and fruits.

Worksheet – 2

Fill in the blanks :

1. Plants make our earthand beautiful.
2. Some plants are very tall and
3. Palms and coconut do not have
4. Peas and money plant are
5. generally live only for a season.

Match the following:

Column A

1. Banyan, Mango.
2. Rose, Tea, Bushes.
3. Mint plant, Tomato.
4. Watermelon.
5. Pea, Grape-vine.
6. Cactus, Opuntia.

Column B

- Shrubs
- Climbers
- Trees
- Desert plants
- Creepers
- Herbs

Project work – 3

Prepare first aid box at your home. You can use an old shoe box so that all the following things are there - sterilized cotton, band aid, cotton bandages, an ointment for burns, a pair of scissors, a bottle of antiseptic, antiseptic cream and tincture iodine.

Worksheet – 3

Fill in the blanks :

1. All living thingspain.
2. Fish through gills
3. A giraffe is a thing.
4. A chair is a thing.
5. The flowers ofplant turn to face the sun light.

True/ False :

1. Fish, insects and birds lay eggs.
2. All living things reproduce.
3. A crow gives birth to babies.

Activity – 1

Grow a plant and take care of it.

Activity – 2

Collect 10 pictures of wild animals and 10 pet animals and paste and label them.

Activity – 3

Name some herbs or plants that act as a doctor and paste the pictures.

Activity – 4

Collect pictures of natural calamities from newspaper, magazines and internet and paste and label them.

Activity – 5

Make a chart showing the entire road safety signs and what do they interpret.

Q.4 Identify the types of plants :-

(Herb, shrub, tree, climber, creeper)

- a.  _____
- b.  _____
- c.  _____
- d.  _____
- e.  _____

Q.5 Answer the following questions :-

a. Write any two amphibians.

- 1. _____
- 2. _____

b. Where do wild animals stay ?

Ans. _____

c. Name the King of the bird.

Ans. _____

Q.6 Write T for true and F for false statements :-

- a. Land animals live only in forests. ()
- b. Bush is another name for creeper. ()

Q.1 Circle the correct option:-

- a. Wild animals live in **forest / with us** .
- b. Very small animals with six legs are **birds / insects** .
- c. We wear **uniform / raincoat** while going to school .
- d. Weak plants that need support to stand are **creepers / climbers** .
- e. We wear cotton clothes in **winter / summer** season .

Q.2 Fill in the blanks with the help of clue box :-

(sheep, trees, warm, creepers)

- a. Winter clothes keep us _____.
- b. We get wool from _____.
- c. Tall and big plants are called _____.
- d. Weak plants that grow along the ground are _____.

Q.3 Write six things that we get from plants :-

- a. _____
- b. _____
- c. _____
- d. _____
- e. _____
- f. _____

Put the following words in the correct box:

carrot pear plum cherry pea potato cabbage

sweed strawberry parsnip apple banana

raspberry broccoli spinach beetroot orange

leek peach onion blackberry

Vegetables



Fruits



By : Pratyancha Kulshreshtha

Saraswati Vidya Mandir senior secondary school Sector ki Aliganj Lucknow

Holidays homework 2023 -24

Class -Third

Subject -SST

*Practice reading of the following chapters. (Chapter 1 to chapter 6)

*Six and find out exercises of these chapter (chapter 1 to 6)

*Practice one page writing daily to improve writing and writing speed.

*Parents are advised to dictate at least 10 words daily word in their notebook and suggest their part to write the incorrect words at least five time.

Activity work :-

*Paste the picture of Dushyant's son Bharat and write the story of his bravery in the project file.

*Write teachings of Mahavir Swami on a punch sheet.

*Collect ,pack ,identify and label the following in activity file:

•five cereals

•5 pulses

•five oil seeds

•five spices

*Make two mask on anyone of the following topic:

•Pet animals

•Wild animals

•Domestic animals

*Draw, colour and write any one of the following National symbols

National fruit

National flower

National bird and National animal

Name: _____

Date: _____



Computer Terms

Word Scramble

Help! The school computer had its memory scrambled and we need your help to get things back in order. Can you unscramble the computer terms and write the correct word on each line?

EITTRNNE

SAEHRC

LLCORS

BOKEDYRA

UNMSAERE

VSIRU

EYRSER

FOTN

MONORIT

EENSRC

HAKCRE

WSREROB

KEERSAP

UADOLP

NTERPRI

IONC

SOTWRFEA

NLDDWAO

SOEUM

RSDAWSPO

EACCH

YEAGBTIG

FODRLE

OEMUDNTC





Identify the different parts of the computer.
Write the names in the blank boxes :

1.

2.



3.

4.

5.





Read and Write.



What we can do on a computer?

1. Playing games _____
2. Solving sums _____
3. Making drawings _____
4. Typing _____
5. Listening music _____

What are machines?

Machines are the things made by us that make our work easier.

Write down the main parts of the computer.

1. CPU _____
2. MONITOR _____
3. KEYBOARD _____
4. MOUSE _____
5. SPEAKERS _____
6. PRINTER _____



Tick (✓) the correct answers.



1. Which of the following is used to type letters?

- a. Keyboard b. Mouse

2. Which of the following is an input device?

- a. Microphone b. Printer

3. Which of the following is an output device?

- a. Scanner b. Monitor

4. Which of the following is a storage device?

- a. CD b. Speakers

5. Which of the following stores more data?

- a. DVD b. CD

6. Where is the hard disk present?

- a. Scanner b. CPU

7. Where is the pen drive inserted?

- a. USC port b. USB port

8. Processing of a data takes place in the _____?

- a. CPU b. Monitor





Name : _____

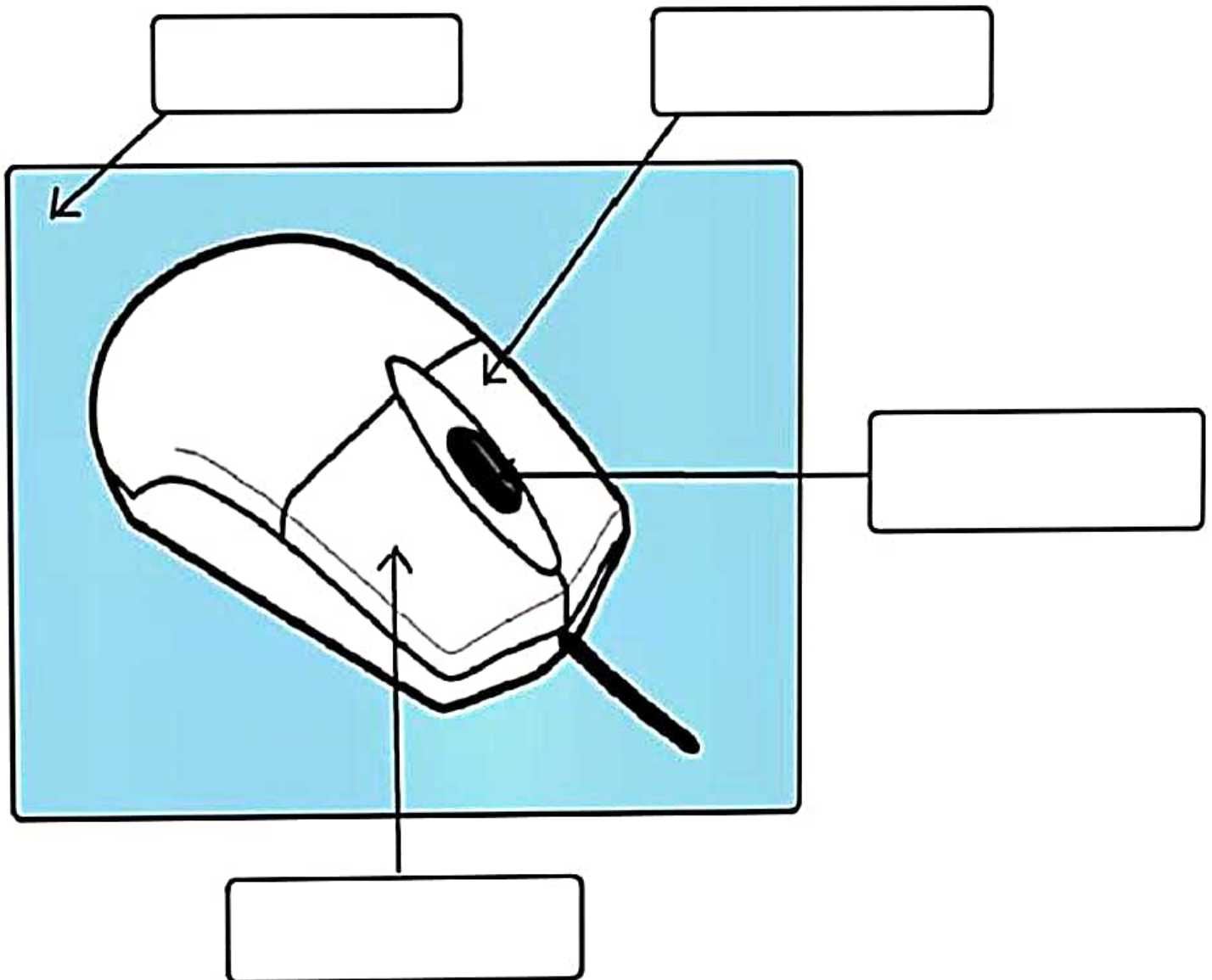
Date : _____

Class : _____



Computer Mouse - Activity

Label the parts of computer mouse and color it.





1. Fill in the blanks by choosing the correct answers.

Scans

Brain

Mistake

Keyboard

Monitor

Pointing

Printer

Speaker

Computer

1. A is an electronic device.

2. A computer never makes any

3. Looks like a television screen.

4. CPU is known as the of computer.

5. Looks like a typewriter.

6. Mouse is a device.

7. Helps us to take work on the paper.

8. Scanner the documents and work into the computer.

9. is used to listen to sound.



Q.1 Match the following :-



(i)



(a) To listen songs

(ii)



(b) To cook food

(iii)



(c) To watch cartoons

(iv)



(d) To wash clothes

(v)



(e) To talk to others

(vi)



(f) Spacebar

(vii)



(g) Backspace Key

(viii)



(h) Number key

(ix)



(i) Special function key

(x)



(j) Alphabetic keys





Main parts of a Computer

| | |
|-----------------|-------|
| Mouse | _____ |
| Monitor | _____ |
| Keyboard | _____ |
| CPU | _____ |

Write T for true & F for false statement.


1. A computer is a man made machine.
2. A printer can't print pictures on paper.
3. We cannot solve sums on the computer.
4. A tree is a machine made by man.
5. Speakers are used to listen to music.
6. A computer mouse helps to point at things on a computer monitor.
7. We cannot draw pictures on the computer.
8. An iron is a machine.
9. A keyboard has 20 keys.
10. A computer monitor looks like a television.
11. A printer is used to print only words on paper.
12. A washing machine is used to wash clothes.



Name: _____

Grade: _____

Section: _____



Draw a line and match the Keyboard Shortcut with their function.

Ctrl + C

F5

Ctrl + V

Ctrl + Z

Ctrl + X

F1

Ctrl + O

Ctrl + Y

Ctrl + P

Copy 

Print 

Cut 

Open 

Help 

Refresh 

Repeat
Typing 

Undo 

Paste 



A. Answer in one word.

1. It is the brain of the computer. _____

2. It helps in recording different sounds into the computer. _____

3. It is used to take live photos and videos.

B. Unscramble the words.

1. NCSNRAE _____

2. KYSTOCIJ _____

3. ONTUPTRI _____

4. BEKYRDAO _____

C. Match the following short forms with their meanings.

| | |
|-----|----------------------------|
| CPU | Uninterrupted Power Supply |
| CD | Digital Versatile Disc |
| DVD | Central Processing Unit |
| UPS | Compact Disc |



Name: _____

Roll no: _____

Date: ___ / ___ / ___



Computer Education Activity- MS Word

Match the following shortcut keys with it's uses.

| | |
|-----------------|--------------------------------|
| CTRL + S | Open a new file |
| CTRL + P | Bold the selected texts |
| CTRL + W | Save a file |
| CTRL + N | Open a saved word file |
| CTRL + B | Print the document |
| CTRL + O | Close the document |

A. Write True or False :

1. We cannot write stories on a computer. _____
2. Songs can be played using computer.

3. Using a computer, we can do forecast weather. _____
4. A computer cannot store all types of information. _____
5. In school, computers are used to monitor the trains timings. _____
6. A computer is a useless machine. _____
7. Banks do not use computers. _____
8. A computer helps in preparing medical records. _____
9. A computer works on Fuel. _____

B. Write two ways to use computers.





Worksheet



Objective Questions

1. Fill in the blanks with suitable Word:

printer keyboard speaker CPU pointing monitor

- a. Computer looks like television set.
- b. The is the brain of the computer.
- c. Mouse is a device.
- d. is used for typing text, numbers and special symbols.
- e. The is used to listen to music.
- f. The is used to print text, numbers and pictures on paper.

2. Write 'T' for true and 'F' for false statements:

- a. Keyboard is a typing device.
- b. Mouse is an input device.
- c. CPU is a pointing device.
- d. Printer is an output device.
- e. Monitor is an output device.
- f. Speaker is an output device.

1. Fill the table below:

| Generation | Technology Used |
|-------------------|------------------------|
| First Generation | |
| Second Generation | |
| Third Generation | |
| Fourth Generation | |
| Fifth Generation | |

2. What is a vacuum tube?

3. What is a transistor?

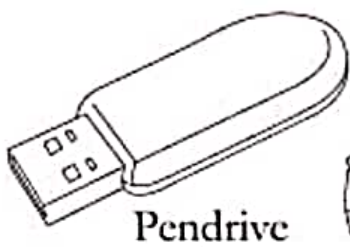
4. What is an Integrated circuit?

5. What is a CPU?

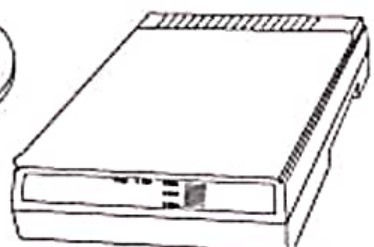
Word Search Puzzle Computer Parts



| | | | | | | | | | |
|---|---|---|---|---|---|---|---|---|---|
| A | P | E | N | D | R | I | V | E | L |
| H | A | R | D | D | I | S | K | A | L |
| L | F | I | N | D | O | C | U | M | A |
| F | L | O | P | P | Y | A | T | O | P |
| W | H | A | M | R | O | N | U | U | T |
| T | I | S | M | I | G | N | T | S | O |
| I | S | S | N | N | A | E | C | E | P |
| M | O | N | I | T | O | R | E | P | I |
| C | A | B | L | E | N | H | T | E | T |
| D | C | O | M | R | A | M | P | L | E |



Pendrive



Scanner



Monitor



Cable



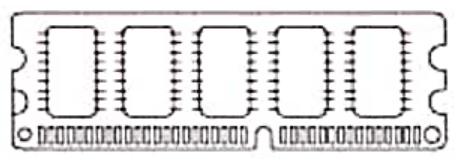
Mouse



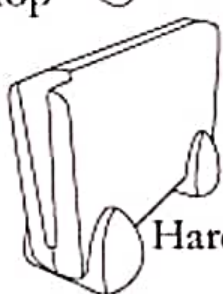
Laptop



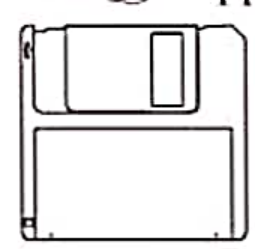
Printer



RAM



Hard Disk



Floppy



Look the following logos and find the names in Puzzle.



Messenger



Classroom



Chrome



Viber



Zoom



Opera



Gmail



| | | | | | | | | | | | |
|---|---|---|---|---|---|---|---|---|---|---|---|
| C | O | M | P | U | T | E | R | A | B | I | T |
| D | A | M | E | S | S | E | N | G | E | R | Z |
| C | R | O | Y | P | U | Z | Z | L | E | L | O |
| D | B | W | C | H | R | O | M | E | L | O | O |
| C | L | A | S | S | R | O | O | M | O | O | N |
| H | A | P | P | L | E | M | P | E | N | U | P |
| R | A | B | B | I | T | H | E | A | H | L | E |
| O | W | D | V | I | B | E | R | O | S | E | E |
| M | O | N | D | A | G | M | A | I | L | S | Y |



Computers

Write the parts of the computer using help box

- | | | |
|----------|---------|----------|
| keyboard | cpu | laptop |
| mouse | speaker | scanner |
| printer | monitor | pendrive |



NAME: _____

DATE: _____

COMPUTER EDUCATION WORKSHEET

Topic: The computer system

Find and tick (✓) the correct answer.



- Television
- Printer
- Monitor



- CPU
- Webcam
- Monitor



- Hard disk
- Joy stick
- Projector



- Microphone
- Speaker
- Headset



- CD/DVD
- Data card
- Pen drive



- Scanner
- Printer
- Hard disk



- Hard disk
- Touch screen
- Light pen



- Webcam
- Scanner
- Projector



Name _____ Grade 1 _____

Matching - Computer Parts

Directions: Identify and match each computer term.



1.

A. Keyboard



2.

B. Monitor



3.

C. Printer



4.

D. CPU



5.

E. Mouse



6.

F. Speakers







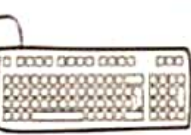


Input and Output Devices - Hardware and Software - Uses of computer

Name: _____




Grade : _____




Date: _____

1. Complete the table:

| | Name of the device | Input/Output |
|---|--------------------|--------------|
|  | _____ | _____ |
|  | _____ | _____ |
|  | _____ | _____ |
|  | _____ | _____ |
|  | _____ | _____ |

2. Identify the hardware and the software and tick (✓) the correct column.

| | Hardware | Software |
|---|----------|----------|
|  | | |
|  | | |
|  | | |

| | Hardware | Software |
|--|----------|----------|
|  | | |
|  | | |
|  | | |



Write the correct numbers in the boxes to match the following.

1. I have keys on me.

a. Pen drive

2. I record your voice.

b. Mouse

3. I help you listen to songs.

c. Headphones

4. I have a scroll wheel.

d. DVD

5. I look like a television.

e. Keyboard

6. I am a round disc.

f. Microphone

7. I give output on a paper.

g. Monitor

8. I copy pictures into the computer.

h. Printer

9. I am also called a flash drive.

i. Scanner

Q. Name any two storage devices.

